

STAT 515 Lec 03 slides

Conditional probability, independence, Bayes' rule

Karl Gregory

University of South Carolina

These slides are an instructional aid; their sole purpose is to display, during the lecture, definitions, plots, results, etc. which take too much time to write by hand on the blackboard. They are not intended to explain or expound on any material.

Conditional probability

The *conditional probability* of A given B is

$$P(A|B) = \frac{P(A \cap B)}{P(B)}.$$

This is the probability that the event A occurs given that B occurs.

Exercise: Roll two dice. Find

- ① $P(\text{doubles})$
- ② $P(\text{sum} \geq 10)$
- ③ $P(\text{doubles} \mid \text{sum} \geq 10)$
- ④ $P(\text{sum} \geq 10 \mid \text{doubles})$

$$\mathcal{S} = \left\{ \begin{array}{cccccc} (1, 1) & (1, 2) & (1, 3) & (1, 4) & (1, 5) & (1, 6) \\ (2, 1) & (2, 2) & (2, 3) & (2, 4) & (2, 5) & (2, 6) \\ (3, 1) & (3, 2) & (3, 3) & (3, 4) & (3, 5) & (3, 6) \\ (4, 1) & (4, 2) & (4, 3) & (4, 4) & (4, 5) & (4, 6) \\ (5, 1) & (5, 2) & (5, 3) & (5, 4) & (5, 5) & (5, 6) \\ (6, 1) & (6, 2) & (6, 3) & (6, 4) & (6, 5) & (6, 6) \end{array} \right\}$$

Exercise: From STAT 515 fa 2019:

- 40 students in class
- 10 students got an 'A' on final exam
- 12 students got an 'A' hw average
- 23 students did not get an 'A' on the final or an 'A' hw average.



If a student is drawn at random from the class, give

- 1 $P(\text{'A' on final})$
- 2 $P(\text{'A' on final} \mid \text{'A' hw average})$
- 3 $P(\text{'A' on final} \mid \text{less than 'A' hw average})$
- 4 $P(\text{less than 'A' on final} \mid \text{less than 'A' hw average})$
- 5 $P(\text{'A' on final} \cap \text{'A' hw average})$

Intersection prob. as conditional times unconditional

For any two events A and B ,

$$P(A \cap B) = P(A|B)P(B) \quad \text{or} \quad P(A \cap B) = P(B|A)P(A).$$

Exercise: Suppose that on a safari, the probabilities of seeing a giraffe (G), a wildebeest (W), and a crocodile (C) are as follows:

$$P(W) = 0.40$$

$$P(C) = 0.60$$

$$P(G) = 0.20$$

$$P(C|W) = 0.775$$

$$P(C|G) = 0.65$$

$$P(G \cap W) = 0.06$$

$$P(G \cap W \cap C) = 0.01$$

Fill out a Venn diagram with the probabilities of all possibilities.

Independence

Two events A and B are called *independent* if

$$P(A \cap B) = P(A)P(B).$$

Equivalent definitions of independence

The following statements are equivalent:

- $P(A \cap B) = P(A)P(B)$
- $P(A) = P(A|B)$
- $P(B) = P(B|A)$

Also: If A, B independent, so are the pairs of events A, B^c and A^c, B and A^c, B^c .

Exercise: Flip a coin twice and let

H_1 = heads on first flip

H_2 = heads on second flip

Find $P(H_1 \cap H_2)$ assuming that the flips are independent.

Exercise: Let

- A = flat tire
- B = forgot spare tube

Suppose that $P(A) = 0.02$ and $P(B) = 0.10$ and $P(A \cap B) = 0.002$.

Are the events independent?

Exercise: Send survey to 10 people. Let $R_i =$ person i responds, $i = 1, \dots, 10$. Assume independence with probability of response 0.20. Give

- ① $P(\text{ Everyone completes survey })$
- ② $P(\text{ No one completes survey })$
- ③ $P(\text{ At least one person completes the survey })$

Exercise: From STAT 515 fa 2019:

- 40 students in class
- 10 students got an 'A' on final exam
- 12 students got an 'A' hw average
- 23 students did not get an 'A' on the final or an 'A' hw average.



If a student is drawn at random from the class, are the events 'A' on final and 'A' hw average independent?

Bayes' Rule (simplified)

For any two events A and B such that $P(A) > 0$,

$$P(B|A) = \frac{P(A|B)P(B)}{P(A|B)P(B) + P(A|B^c)P(B^c)}.$$



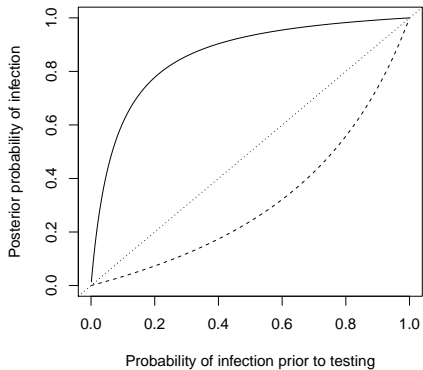
Show why...

Exercise: Suppose 20% of a population has an infection. Suppose a test is positive with probability 0.70 when the infection is present and negative with probability 0.95 when the infection is absent.

For a randomly selected person from the population, find:

- ① $P(\text{infection} \mid \text{positive test})$
- ② $P(\text{no infection} \mid \text{negative test})$
- ③ If 100 people are tested, among whom 20 have the infection, how many do you expect of
 - ▶ False positives
 - ▶ True positives
 - ▶ False negatives
 - ▶ True negatives
- ④ Suppose a person is tested twice, with test outcomes independent. Find
 - ▶ $P(\text{infection} \mid \text{two positive tests})$
 - ▶ $P(\text{infection} \mid \text{two negative tests})$

Leaf plot under Sens = 0.7 and Spec = 0.95



Bayes' Rule







For an event A in S and a partition B_1, \dots, B_K of S , we have

$$P(B_k|A) = \frac{P(A|B_k)P(B_k)}{P(A|B_1)P(B_1) + \dots + P(A|B_K)P(B_K)}.$$

Show why...

Get simplified version noting that B and B^c form a partition of S .

Exercise: Roll a die and draw one bill from a bag as follows:

Roll , ,  \rightarrow draw from bag 1: 3 \$5 bills and 1 \$20 bill
 Roll ,  \rightarrow draw from bag 2: 2 \$5 bills and 2 \$20 bills
 Roll  \rightarrow draw from bag 3: 1 \$5 bill and 3 \$20 bills

- 1 What is the probability that you get \$20?
- 2 Given that you get \$20, what is the probability that you drew from bag 1?
- 3 If you did this 1000 times:
 - ▶ How many times would you expect to get \$20?
 - ▶ Of the times you get \$20, on how many do you expect it to be from bag 1?